
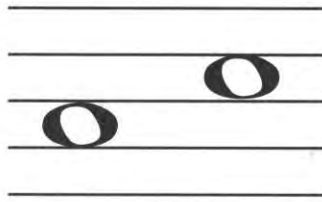


Intervals on the Staff and Keyboard

A. Name the interval on each staff. Is it a 2nd, 3rd, or 4th?



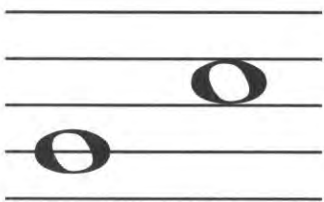
1. _____




2. _____



3. _____



4. _____



5. _____

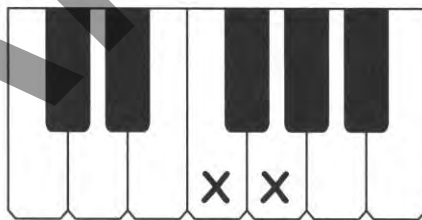


6. _____

B. Name the interval on each keyboard. Is it a 2nd, 3rd, or 4th?



1. _____



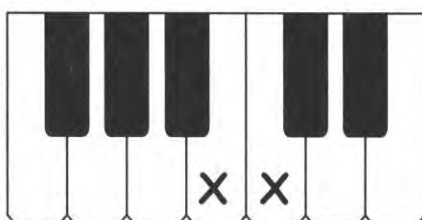
2. _____




3. _____



4. _____




5. _____



6. _____

Eighth Notes

A. Trace these notes then draw four more.



B. Color the boxes to show each note value.

